


Stem-and-Leaf Plot

- 1) Maria's backyard has a lot of trees. The ages of trees in years are given below. Make a stem-and-leaf plot.

6.7, 7.1, 5.3, 4.7, 7.8, 5.7, 4.2, 6.2, 5.9, 5.4, 7.5, 4.6, 7.9, 6.1, 4.7

Stem	Leaf
------	------

Key : 7|5 =



PREVIEW

Gain complete access to the largest collection of worksheets in all subjects!

Members, please log in to download this worksheet.


Not a member? Please sign up to gain complete access.

www.mathworksheets4kids.com

- 2) Mark and his friends played video games for 16 hours on console. The time (in seconds) recorded below. Make a stem-and-leaf plot.
- 705, 720, 711

Stem	Leaf
------	------

Key : 70|8 = _____




Stem-and-Leaf Plot

- 1) Maria’s backyard has a lot of trees. The ages of trees in years are given below. Make a stem-and-leaf plot.

6.7, 7.1, 5.3, 4.7, 7.8, 5.7, 4.2, 6.2, 5.9, 5.4, 7.5, 4.6, 7.9, 6.1, 4.7

Stem	Leaf
4	2 6 7 7
5	3
6	1
7	1

Key: 7|5



PREVIEW

Gain complete access to the largest collection of worksheets in all subjects!

Members, please log in to download this worksheet.

Not a member? Please sign up to gain complete access.

www.mathworksheets4kids.com

- 2) Mark and his friends played a video game for 16 hours on console. The time (in seconds) recorded below.
- 705, 720, 711

Stem	Leaf
70	5
71	1 3 4 6 6
72	0 2 5

Key : 70|8 = 708 seconds

