

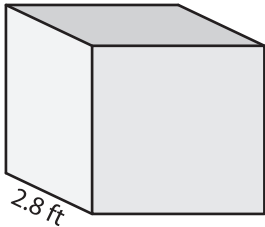
Name : _____

Surface Area - Cube

Sheet 3

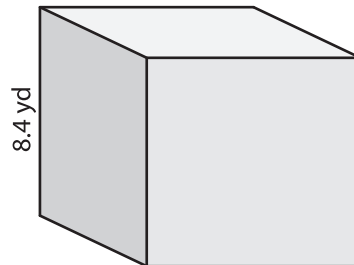
Find the surface area of each cube.

1)



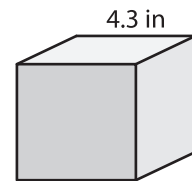
surface area = _____

2)

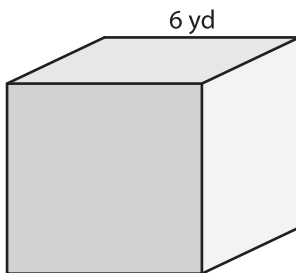


surface area = _____

3)



4)



surface area = _____

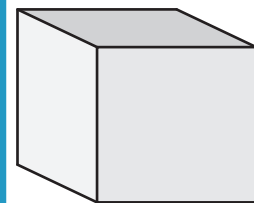
PREVIEW

Gain complete access to the largest collection of worksheets in all subjects!

Members, please log in to download this worksheet.

Not a member? Please sign up to gain complete access.

www.mathworksheets4kids.com



surface area = _____

7) Find the surface area of a cube with a side length of 5.5 ft.

8) If the side length of the cube is 9.2 yards, determine the surface area.
