


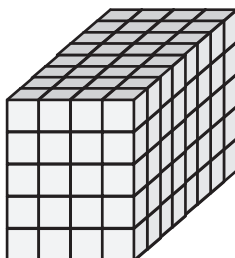
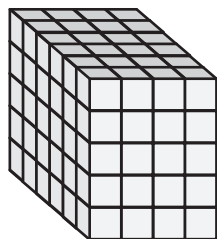
# Surface Area - Counting Squares

Count the unit squares and find the surface area of each rectangular prism.

1)  $\square = 4 \text{ in}^2$

2)  $\square = 9 \text{ yd}^2$

3)  $\square = 6 \text{ ft}^2$

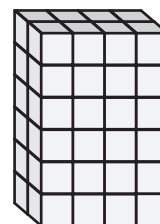
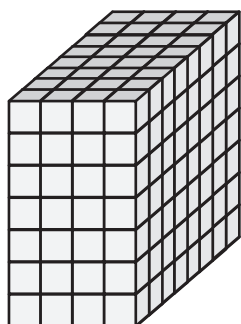


Surface Area = \_\_\_\_\_

Surface Area = \_\_\_\_\_

4)  $\square = 1 \text{ ft}^2$

$\square = 2 \text{ yd}^2$

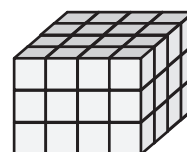
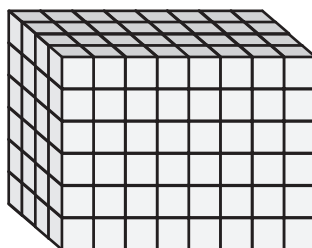
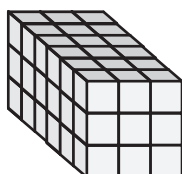


Surface Area = \_\_\_\_\_

Surface Area = \_\_\_\_\_

7)  $\square = 5 \text{ yd}^2$

$\square = 8 \text{ in}^2$



Surface Area = \_\_\_\_\_

Surface Area = \_\_\_\_\_

Surface Area = \_\_\_\_\_

## PREVIEW

Gain complete access to the largest collection of worksheets in all subjects!

Members, please log in to download this worksheet.

Not a member? Please sign up to gain complete access.

www.mathworksheets4kids.com