


Name : _____


Surface Area - Counting Squares

Sheet 1

 = 1 in²


Draw a rectangular prism for each set of dimensions, and find its surface area.

1) $l = 5$ in, $w = 3$ in, $h = 2$ in




Surface Area = _____

2) $l = 4$ in, $w = 4$ in, $h = 2$ in




3) $l = 7$ in, $w = 4$ in, $h = 4$ in



Surface Area = _____

5) $l = 2$ in, $w = 2$ in, $h = 3$ in



Surface Area = _____

PREVIEW

Gain complete access to the largest collection of worksheets in all subjects!

Members, please log in to download this worksheet.

Not a member? Please sign up to gain complete access.

www.mathworksheets4kids.com

Surface Area = _____