


Name : \_\_\_\_\_


## Surface Area - Counting Squares

Sheet 3

 = 1 yd<sup>2</sup>


Draw a rectangular prism for each set of dimensions, and find its surface area.

1)  $l = 3$  yd,  $w = 2$  yd,  $h = 3$  yd




Surface Area = \_\_\_\_\_

2)  $l = 3$  yd,  $w = 3$  yd,  $h = 4$  yd




3)  $l = 4$  yd,  $w = 3$  yd,  $h = 1$  yd



Surface Area = \_\_\_\_\_

5)  $l = 2$  yd,  $w = 2$  yd,  $h = 2$  yd



Surface Area = \_\_\_\_\_

**PREVIEW**

Gain complete access to the largest collection of worksheets in all subjects!

Members, please log in to download this worksheet.

Not a member? Please sign up to gain complete access.

[www.mathworksheets4kids.com](http://www.mathworksheets4kids.com)

Surface Area = \_\_\_\_\_