

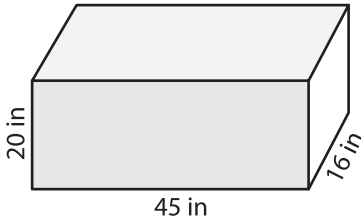
Name : _____

Surface Area - Rectangular Prism

Integers: MS2

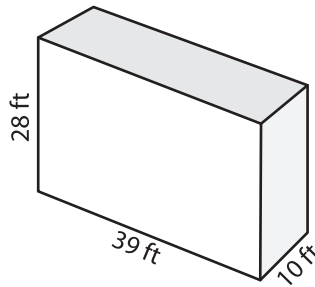
Find the surface area of each rectangular prism.

1)



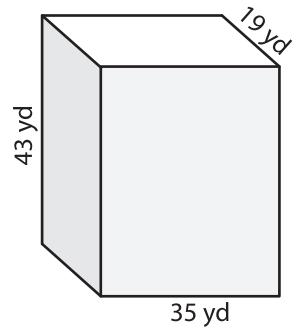
Surface Area = _____

2)



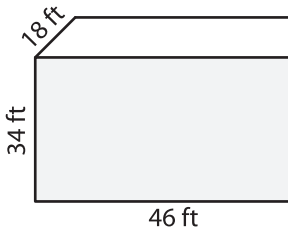
Surface Area = _____

3)

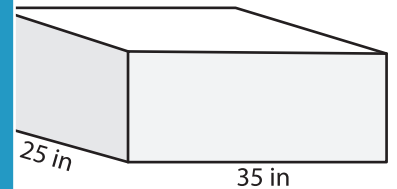


Surface Area = _____

4)

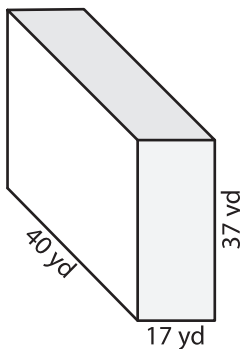


Surface Area = _____



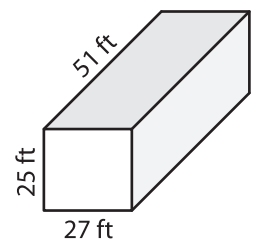
Surface Area = _____

7)



Surface Area = _____

Surface Area = _____



Surface Area = _____

PREVIEW

Gain complete access to the largest collection of worksheets in all subjects!

Members, please log in to download this worksheet.

Not a member? Please sign up to gain complete access.

www.mathworksheets4kids.com

- 10) A small box of chocolates in the shape of a rectangular prism is 6 inches long, 3 inches wide, and 4 inches tall. If a box is wrapped with foil paper, find how much foil paper is needed to wrap the box?

Foil paper needed: _____