

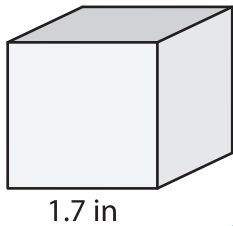
Name : _____

Volume - Cube

Sheet 1

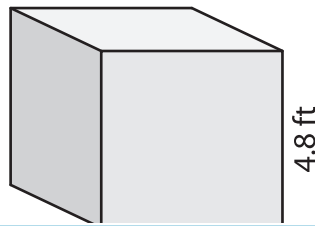
A) Find the volume of each cube. Round your answer to two decimal places.

1)



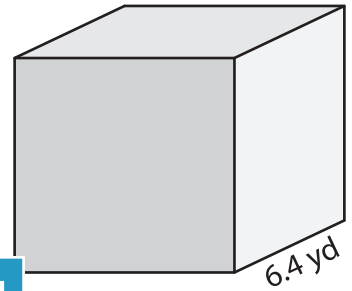
Volume = _____

2)



Volume = _____

3)



Volume = _____

B) Find the volume of each cube. Round your answer to two decimal places.

4) side length = 2.3 in

Volume = _____

6) side length = 7.2 yd

Volume = _____

PREVIEW

Gain complete access to the largest collection of worksheets in all subjects!

Members, please log in to download this worksheet.

Not a member? Please sign up to gain complete access.

www.mathworksheets4kids.com

Volume = _____

8) A cubical water tank has a height of 9.6 inches. How much water can the tank hold? Round your answer to two decimal places.
