

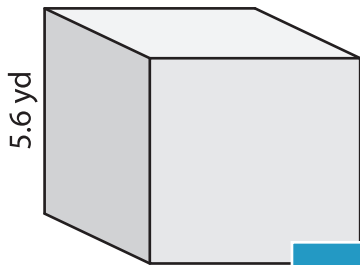
Name : \_\_\_\_\_

## Volume - Cube

Sheet 3

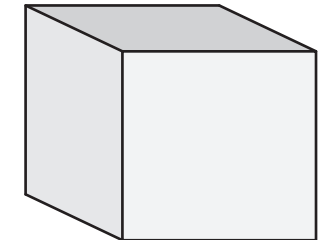
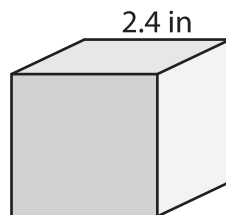
A) Find the volume of each cube. Round your answer to two decimal places.

1)



Volume = \_\_\_\_\_

2)



Volume = \_\_\_\_\_

B) Find the volume of each cube. Round your answer to two decimal places.

4) side length = 6.5 yd

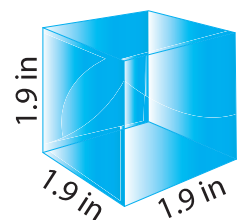
Volume = \_\_\_\_\_

6) side length = 3.3 ft

Volume = \_\_\_\_\_

Volume = \_\_\_\_\_

8) Find the volume of the paper weight. Round your answer to two decimal places.



**PREVIEW**

Gain complete access to the largest collection of worksheets in all subjects!

Members, please log in to download this worksheet.

Not a member? Please sign up to gain complete access.

[www.mathworksheets4kids.com](http://www.mathworksheets4kids.com)