

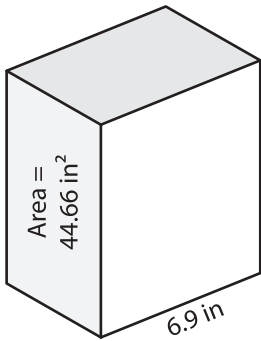
Name : \_\_\_\_\_

## Volume - Rectangular Prism

Decimals: S2

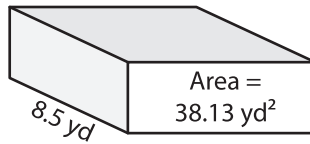
Find the volume of each rectangular prism. Round your answer to two decimal places.

1)

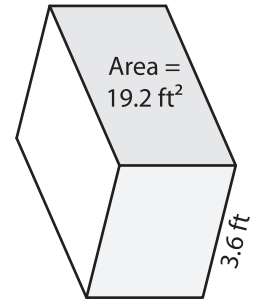


Volume = \_\_\_\_\_

2)

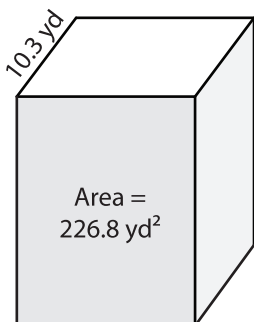


3)



Volume = \_\_\_\_\_

4)



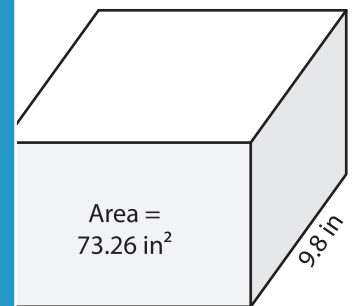
Volume = \_\_\_\_\_

**PREVIEW**  
Gain complete access to the largest collection of worksheets in all subjects!

Members, please log in to download this worksheet.

Not a member? Please sign up to gain complete access.

[www.mathworksheets4kids.com](http://www.mathworksheets4kids.com)



Volume = \_\_\_\_\_

7) Find the volume of the re

: and a height of 2 feet.

\_\_\_\_\_

8) A rectangular prism has a height of 12.5 inches and a base with area of 125.76 square inches. What is its volume?

\_\_\_\_\_