

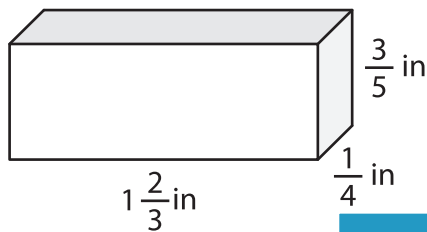
Name : _____

Volume - Rectangular Prism

Fractions: S1

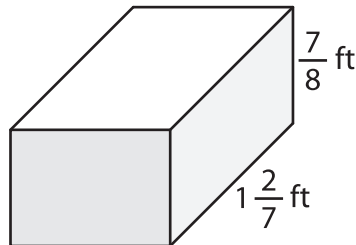
A) Find the volume of each rectangular prism.

1)

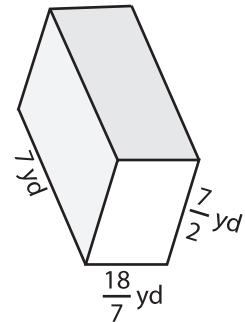


Volume = _____

2)



3)



Volume = _____

B) Find the volume of each

4) width = $\frac{3}{4}$ in ; height = 1

Volume = _____

6) length = 4 ft ; width = $\frac{5}{7}$

Volume = _____

Gain complete access to the largest collection of worksheets in all subjects!

Members, please log in to download this worksheet.

Not a member? Please sign up to gain complete access.

www.mathworksheets4kids.com

height = 1 yd ; width = $\frac{4}{3}$ yd

height = $\frac{5}{2}$ in ; width = $\frac{3}{7}$ in

Volume = _____

8) The length, width and height of a rectangular prism are $\frac{9}{4}$ feet, $3\frac{2}{3}$ feet and $1\frac{1}{11}$ feet respectively. What is its volume?
