




Name : _____

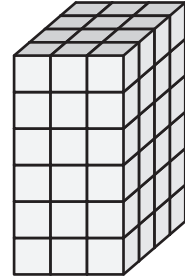
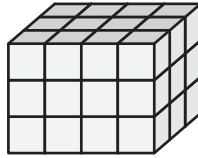
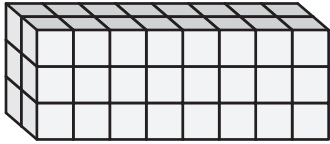
Counting Cubes - Rectangular Prisms

Count the cubes and find the volume of each rectangular prism.

1)  = 6 in³


2)  = 4 ft³


3)  = 9 yd³

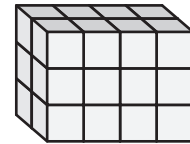



Volume = _____

Volume = _____


4)  = 2 yd³


 = 3 ft³



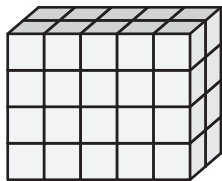


Volume = _____

Volume = _____

7)  = 8 ft³

 = 1 in³



Volume = _____

Volume = _____

Volume = _____

PREVIEW

Gain complete access to the largest collection of worksheets in all subjects!

Members, please log in to download this worksheet.

Not a member? Please sign up to gain complete access.

www.mathworksheets4kids.com