
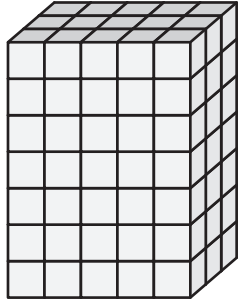


Name : _____


Counting Cubes - Rectangular Prisms


Count the cubes and find the volume of each rectangular prism.


1)  = 1 ft³

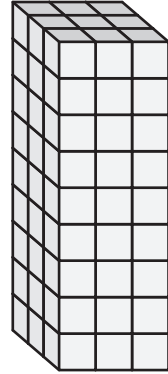


Volume = _____


2)  = 5 yd³

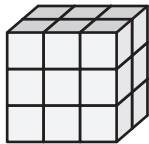


3)  = 2 in³




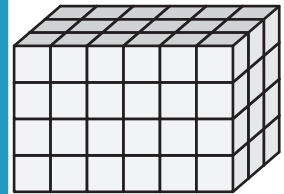
Volume = _____

4)  = 3 in³




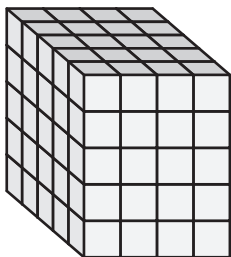
Volume = _____

 = 8 yd³



Volume = _____

7)  = 9 yd³



Volume = _____

Volume = _____

Volume = _____

PREVIEW

Gain complete access to the largest collection of worksheets in all subjects!

Members, please log in to download this worksheet.

Not a member? Please sign up to gain complete access.

www.mathworksheets4kids.com