





Counting Cubes - Solid Blocks

Count the cubes and find the volume of each solid block.


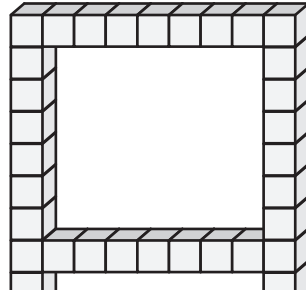
1)  = 5 ft³

2)  = 7 yd³


3)  = 6 in³




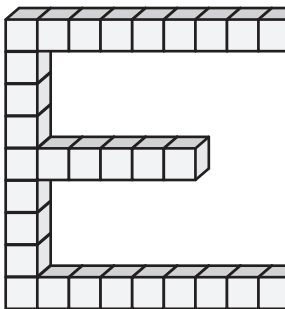
Volume = _____




Volume = _____

4)  = 3 yd³


 = 2 ft³




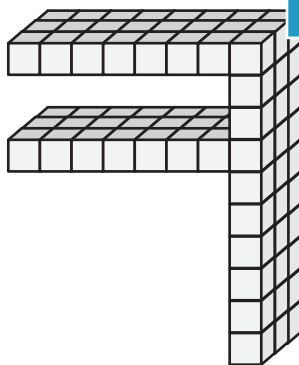
Volume = _____



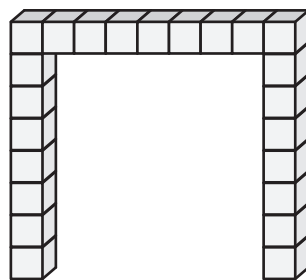
Volume = _____

7)  = 8 in³


 = 4 yd³



Volume = _____



Volume = _____



Volume = _____

PREVIEW

Gain complete access to the largest collection of worksheets in all subjects!

Members, please log in to download this worksheet.

Not a member? Please sign up to gain complete access.

www.mathworksheets4kids.com