



Name : \_\_\_\_\_


# Counting Cubes - Solid Blocks

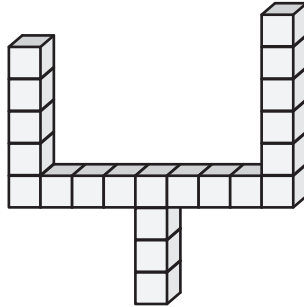
Count the cubes and find the volume of each solid block.


1)  = 8 yd<sup>3</sup>

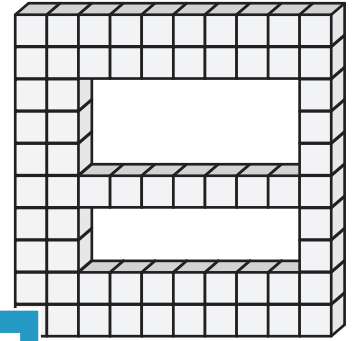


Volume = \_\_\_\_\_


2)  = 9 in<sup>3</sup>

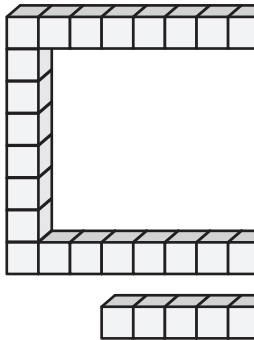


3)  = 3 ft<sup>3</sup>



Volume = \_\_\_\_\_

4)  = 4 in<sup>3</sup>



Volume = \_\_\_\_\_


**PREVIEW**


Gain complete access to the largest collection of worksheets in all subjects!

Members, please log in to download this worksheet.


Not a member? Please sign up to gain complete access.

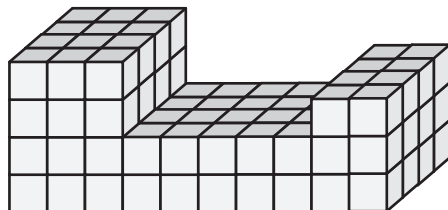
[www.mathworksheets4kids.com](http://www.mathworksheets4kids.com)

 = 9 yd<sup>3</sup>

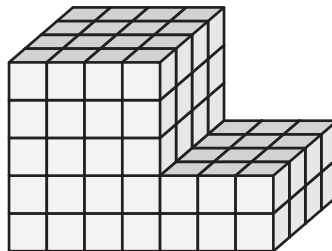


Volume = \_\_\_\_\_


7)  = 2 ft<sup>3</sup>

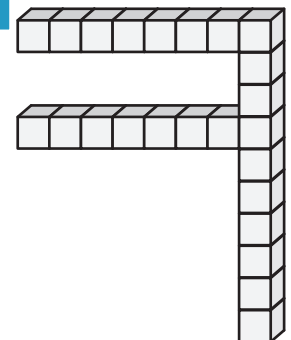


Volume = \_\_\_\_\_



Volume = \_\_\_\_\_

 = 6 in<sup>3</sup>



Volume = \_\_\_\_\_