

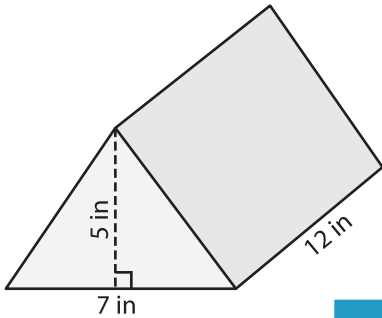
Name : _____

Volume - Triangular Prism

ES1

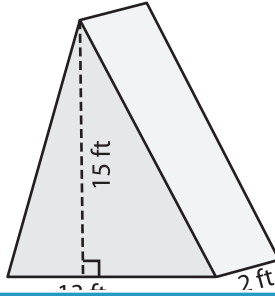
Find the volume of each triangular prism.

1)

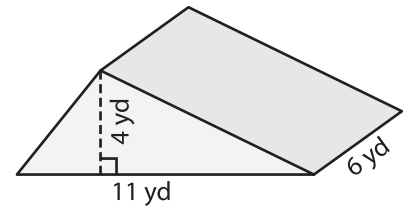


Volume = _____

2)

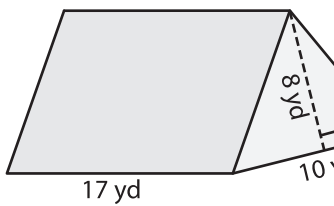


3)



Volume = _____

4)



Volume = _____

7) The base of a prism is a right triangle with a base of 14 feet and a height of 10 feet. Find the volume of the prism.

8) The base of a prism is a triangle with a base of 9 inches and a height of 5 inches. Determine the volume if its length is 18 inches.

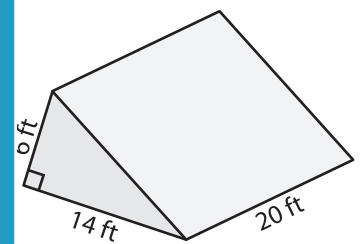
PREVIEW

Gain complete access to the largest collection of worksheets in all subjects!

Members, please log in to download this worksheet.

Not a member? Please sign up to gain complete access.

www.mathworksheets4kids.com



Volume = _____

the height of the prism is _____