

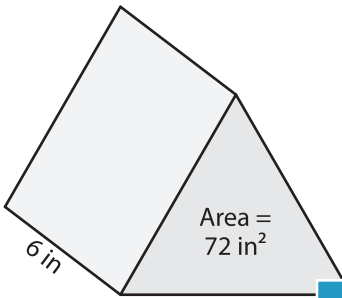
Name : _____

Volume - Triangular Prism

Integers: S1

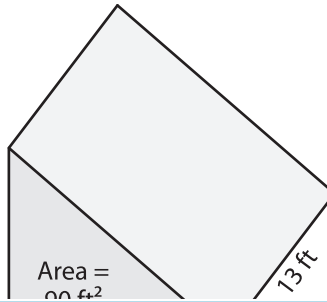
Find the volume of each triangular prism.

1)

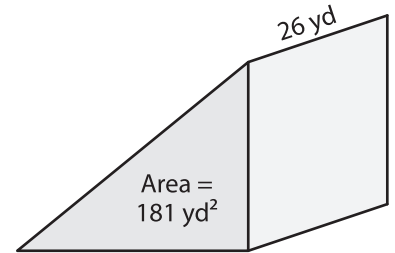


Volume = _____

2)

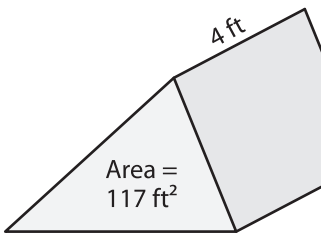


3)



Volume = _____

4)



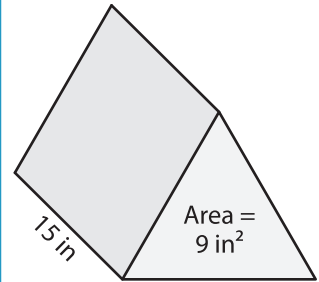
Volume = _____

PREVIEW
Gain complete access to the largest collection of worksheets in all subjects!

Members, please log in to download this worksheet.

Not a member? Please sign up to gain complete access.

www.mathworksheets4kids.com



Volume = _____

7) The base area of a triangular prism is 120 square feet and its length is 20 feet.

Volume = _____

8) A triangular prism has a height of 16 yards and a base with area of 169 square yards. What is its volume?
