

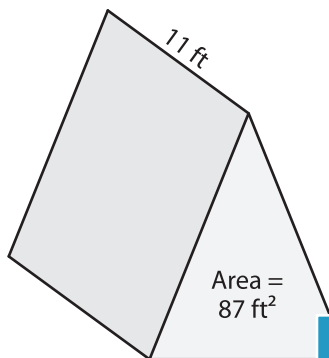
Name : _____

Volume - Triangular Prism

Integers: S2

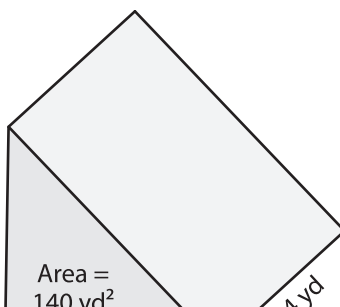
Find the volume of each triangular prism.

1)

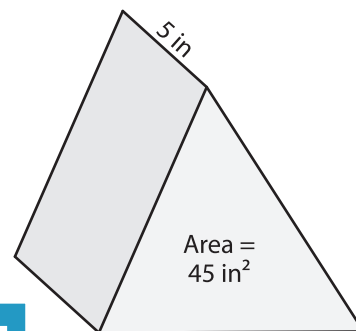


Volume = _____

2)

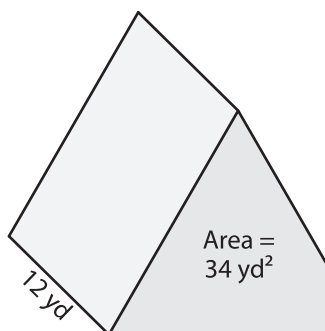


3)



Volume = _____

4)



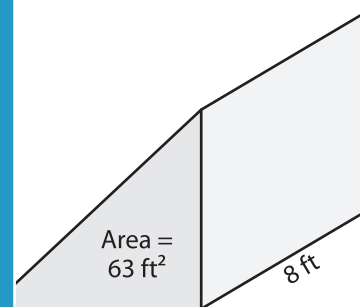
Volume = _____

PREVIEW
Gain complete access to the largest collection of worksheets in all subjects!

Members, please log in to download this worksheet.

Not a member? Please sign up to gain complete access.

www.mathworksheets4kids.com



Volume = _____

7) The height of a triangular

is, what is its volume?

8) Determine the volume of the triangular prism with a base area of 29 square inches and a height of 25 inches.
