

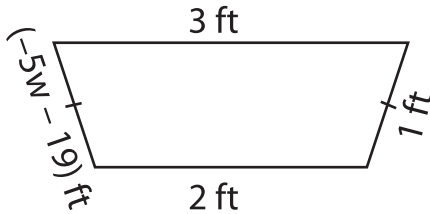
Name : _____

Two-Step Equations: Shapes

Type 1: S2

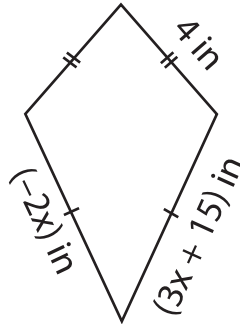
Find the unknown value given in each shape.

1)

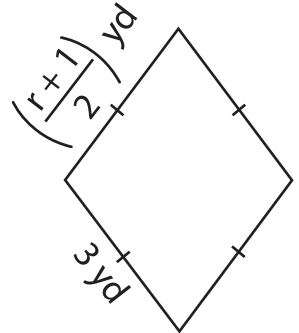


$w =$ _____

2)

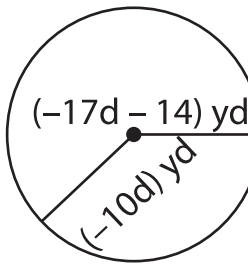


3)



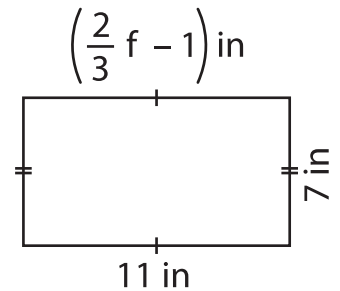
$r =$ _____

4)



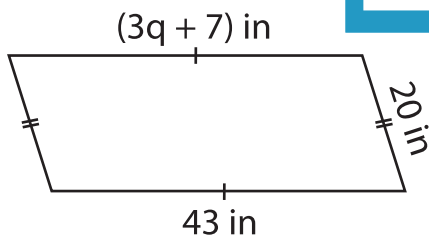
$d =$ _____

5)



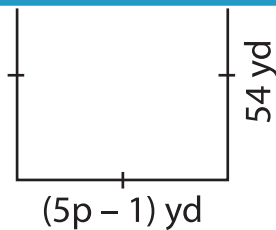
$f =$ _____

7)

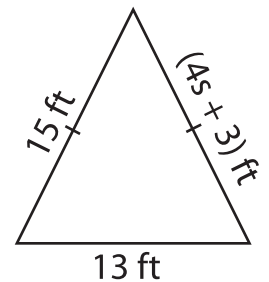


$q =$ _____

8)



$p =$ _____



$s =$ _____

PREVIEW

Gain complete access to the largest collection of worksheets in all subjects!

Members, please log in to download this worksheet.

Not a member? Please sign up to gain complete access.

www.mathworksheets4kids.com