

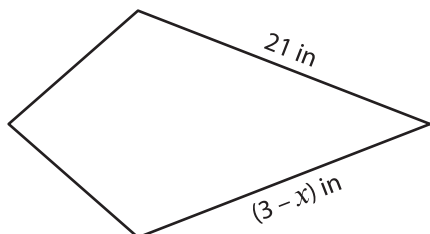
Name : _____

Kite

Sheet 1

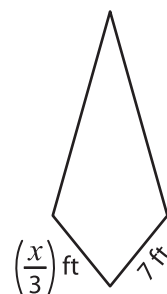
A) Find the value of x in each kite.

1)



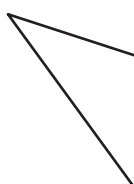
$x =$ _____

2)



$x =$ _____

3)



$x =$ _____

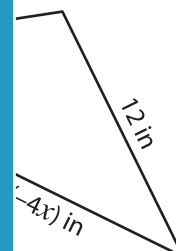
PREVIEW

Gain complete access to the largest collection of worksheets in all subjects!

Members, please log in to download this worksheet.

Not a member? Please sign up to gain complete access.

www.mathworksheets4kids.com

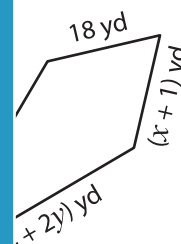
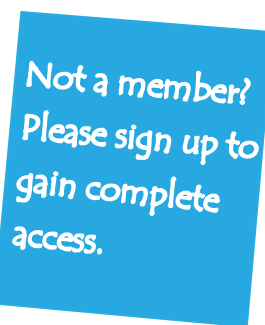


B) Find the value of x and y in each kite.

5)

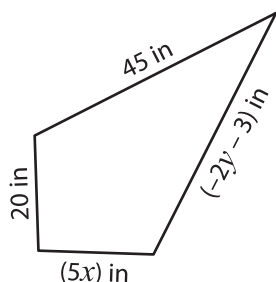


$x =$ _____



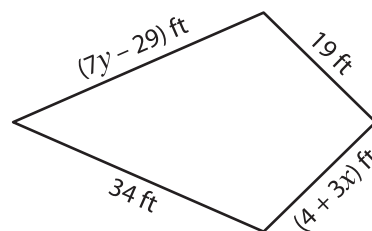
_____ ; $y =$ _____

7)



$x =$ _____ ; $y =$ _____

8)



$x =$ _____ ; $y =$ _____