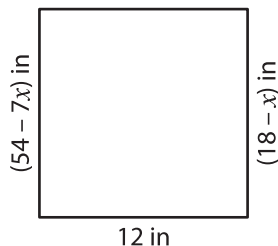


Name : _____

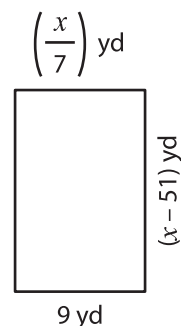
Solving Equations - Area of Rectangles

Solve for x and then find the area of each rectangle.

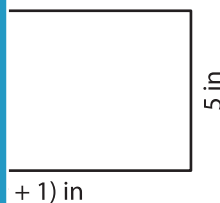
1)



2)



3)

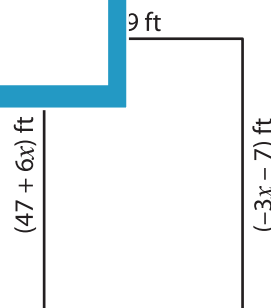



$x =$ _____

Area = _____

$x =$ _____

5)



$x =$ _____

Area = _____

$x =$ _____

Area = _____

PREVIEW

Gain complete access to the largest collection of worksheets in all subjects!

Members, please log in to download this worksheet.

Not a member? Please sign up to gain complete access.

www.mathworksheets4kids.com