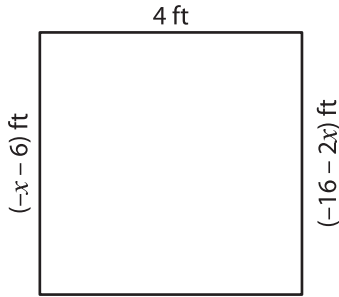


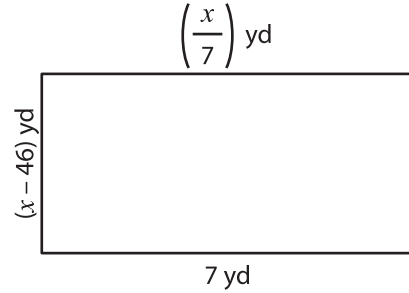
**Solving Equations - Perimeter of Rectangles**

Solve for  $x$  and then find the perimeter of each rectangle.

1)

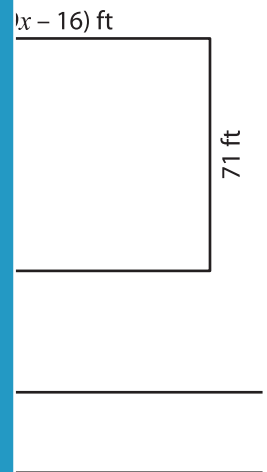


2)



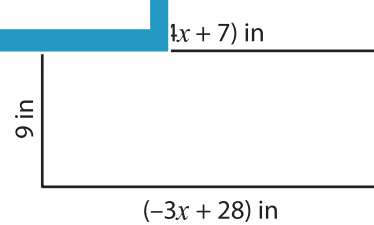
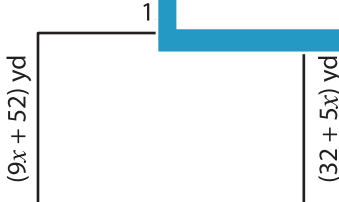
3)

$x =$  \_\_\_\_\_  
Perimeter = \_\_\_\_\_



$x =$  \_\_\_\_\_  
Perimeter = \_\_\_\_\_

5)



$x =$  \_\_\_\_\_  
Perimeter = \_\_\_\_\_

$x =$  \_\_\_\_\_  
Perimeter = \_\_\_\_\_

**PREVIEW**

Gain complete access to the largest collection of worksheets in all subjects!

Members, please log in to download this worksheet.

Not a member? Please sign up to gain complete access.

[www.mathworksheets4kids.com](http://www.mathworksheets4kids.com)