

Name : _____

Solving Equations - Rectangles


Find the value of x .

1)



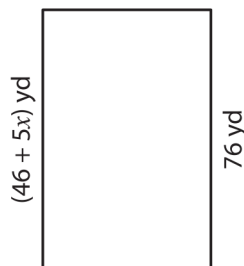
$x =$ _____

2)



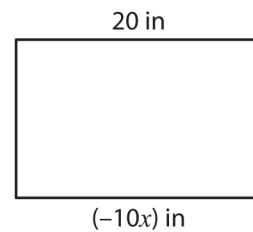
$x =$ _____

3)



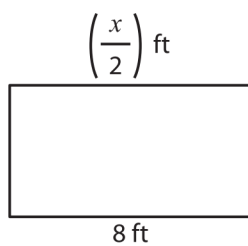
$x =$ _____

4)



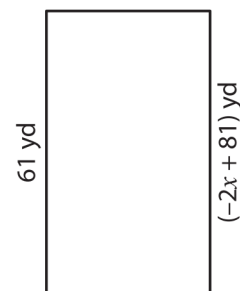
$x =$ _____

5)




$x =$ _____

6)




$x =$ _____

7)



$x =$ _____

8)



$x =$ _____