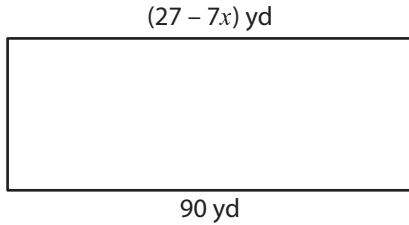


Solving Equations - Rectangles

Find the value of x .

1)



$x =$ _____

2)



$x =$ _____

3)



$x =$ _____

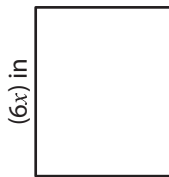
$x + 65$ yd



39 yd

$x =$ _____

5)



$x =$ _____

2 ft



$\frac{x}{9}$ ft

$x =$ _____

PREVIEW


Gain complete access to the largest collection of worksheets in all subjects!

Members, please log in to download this worksheet.

Not a member? Please sign up to gain complete access.

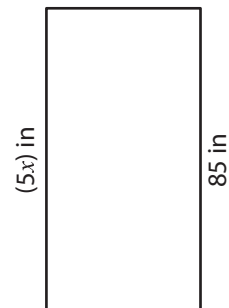
www.mathworksheets4kids.com

7)



$x =$ _____

8)

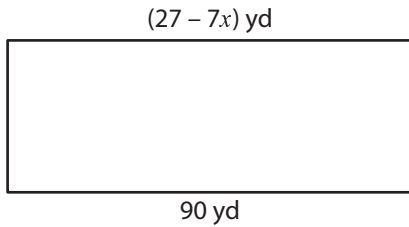


$x =$ _____

Solving Equations - Rectangles

Find the value of x .

1)



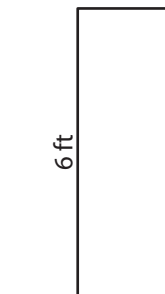
$$x = \underline{\quad -9 \quad}$$

2)



$$x = \underline{\quad 9 \quad}$$

3)



$$x = \underline{\quad \quad}$$

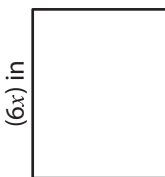
PREVIEW

Gain complete access to the largest
collection of worksheets in all subjects!



$$x = \underline{\quad 13 \quad}$$

5)

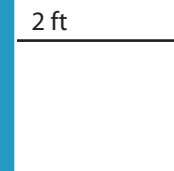


$$x = \underline{\quad \quad}$$

Members, please
log in to
download this
worksheet.


Not a member?
Please sign up to
gain complete
access.

www.mathworksheets4kids.com



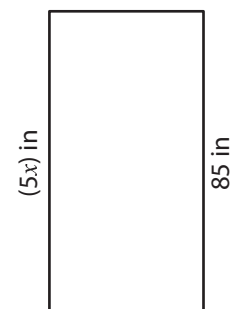
$$x = \underline{\quad 18 \quad}$$

7)



$$x = \underline{\quad 6 \quad}$$

8)



$$x = \underline{\quad 17 \quad}$$