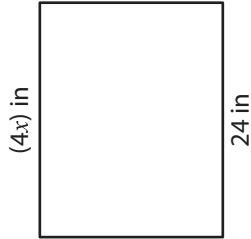


Solving Equations - Rectangles

Find the value of x .

1)



$x =$ _____

2)




$x =$ _____


3)



$x =$ _____



5)



$x =$ _____



PREVIEW


Gain complete access to the largest collection of worksheets in all subjects!

Members, please log in to download this worksheet.

Not a member? Please sign up to gain complete access.

www.mathworksheets4kids.com

7)



$x =$ _____

8)

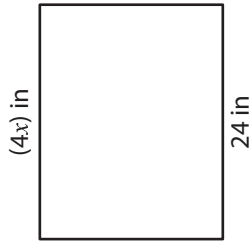


$x =$ _____

Solving Equations - Rectangles

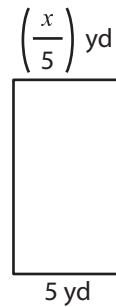
Find the value of x .

1)



$$x = \underline{\quad 6 \quad}$$

2)



$$x = \underline{\quad 25 \quad}$$

3)



$$x = \underline{\quad \quad}$$


PREVIEW

Gain complete access to the largest collection of worksheets in all subjects!

Members, please log in to download this worksheet.


Not a member? Please sign up to gain complete access.

www.mathworksheets4kids.com



$$x = \underline{\quad 34 \quad}$$

5)




$$x = \underline{\quad \quad}$$



$$x = \underline{\quad 5 \quad}$$

7)



$$x = \underline{\quad -20 \quad}$$

8)



$$x = \underline{\quad 7 \quad}$$