

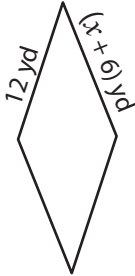
Name : _____

Rhombus

Sheet 1

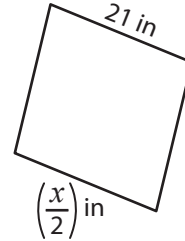
A) Find the value of x in each rhombus.

1)



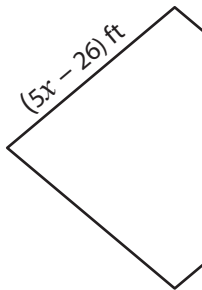
$x =$ _____

2)



$x =$ _____

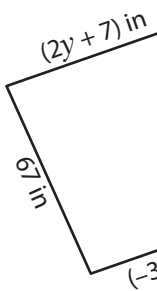
3)



$x =$ _____

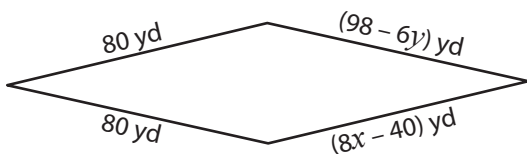
B) Find the value of

5)



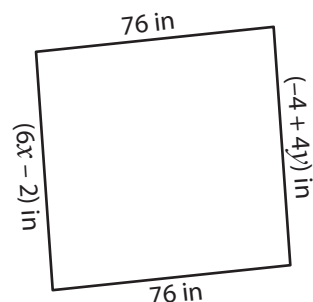
$x =$ _____ ;

7)



$x =$ _____ ; $y =$ _____

8)



$x =$ _____ ; $y =$ _____

PREVIEW

Gain complete access to the largest collection of worksheets in all subjects!

Members, please log in to download this worksheet.

Not a member? Please sign up to gain complete access.

www.mathworksheets4kids.com