

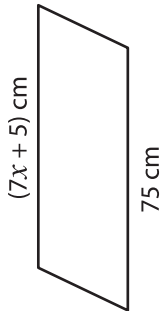
Name : _____

Parallelogram

Sheet 2

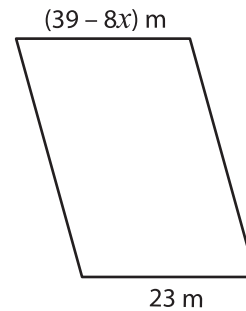
A) Find the value of x in each parallelogram.

1)



$x =$ _____

2)



$x =$ _____

3)



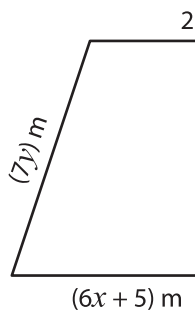
$x =$ _____



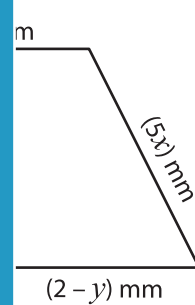
$x =$ _____

B) Find the value of

1)

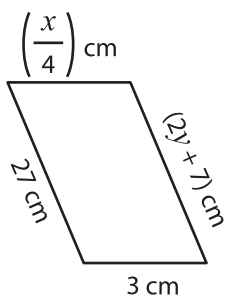


$x =$ _____ ;



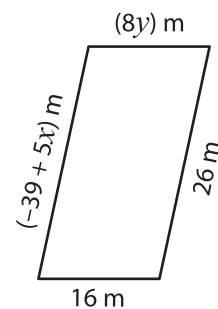
_____ ; $y =$ _____

3)



$x =$ _____ ; $y =$ _____

4)



$x =$ _____ ; $y =$ _____

PREVIEW

Gain complete access to the largest collection of worksheets in all subjects!

Members, please log in to download this worksheet.

Not a member? Please sign up to gain complete access.

www.mathworksheets4kids.com