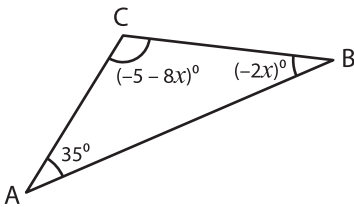


Triangle - Interior Angles

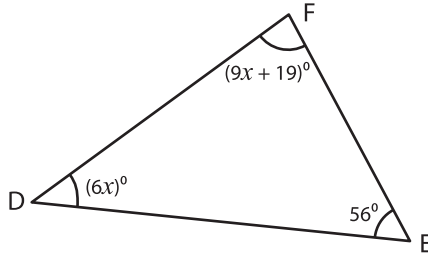
A) Solve for x in each triangle and find the measure of the indicated interior angle.

1)



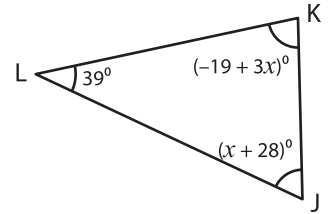
$x =$ _____
 $m\angle C =$ _____

2)



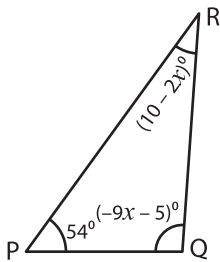
$x =$ _____

3)

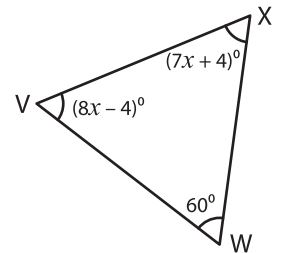


$x =$ _____
 $m\angle J =$ _____

4)



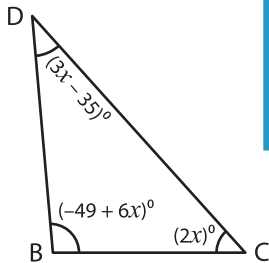
$x =$ _____
 $m\angle Q =$ _____



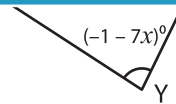
$x =$ _____
 $m\angle V =$ _____

B) Solve for x in each triangle and find the measure of the indicated interior angle.

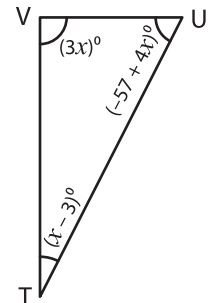
7)



$x =$ _____
 $m\angle B =$ _____
 $m\angle C =$ _____
 $m\angle D =$ _____



$x =$ _____
 $m\angle X =$ _____
 $m\angle Y =$ _____
 $m\angle Z =$ _____



$x =$ _____
 $m\angle T =$ _____
 $m\angle U =$ _____
 $m\angle V =$ _____

PREVIEW

Gain complete access to the largest collection of worksheets in all subjects!

Members, please log in to download this worksheet.

Not a member? Please sign up to gain complete access.

www.mathworksheets4kids.com