

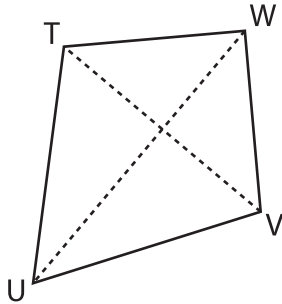
Name : _____

Area of a Kite

T1S1

Find the area of each kite.

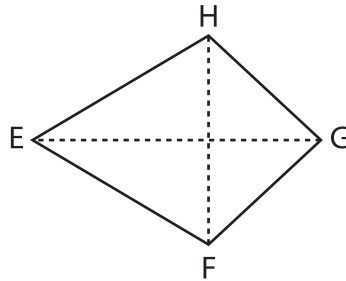
1)



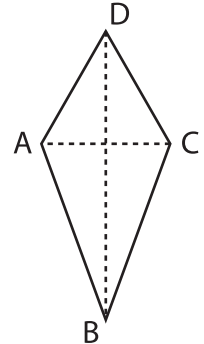
$TV = 5.9$ ft, $UW = 9.2$

Area = _____

2)



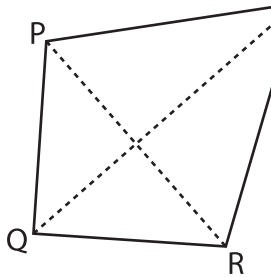
3)



$DB = 53.5$ yd, $AC = 10.2$ yd

Area = _____

4)



$PR = 8.5$ in, $QS = 11.2$

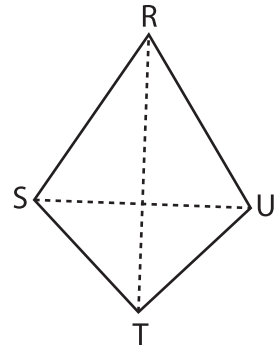
Area = _____

Gain complete access to the largest collection of worksheets in all subjects!

Members, please log in to download this worksheet.

Not a member? Please sign up to gain complete access.

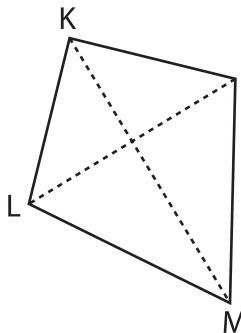
www.mathworksheets4kids.com



$RU = 41.2$ ft, $ST = 65.1$ ft

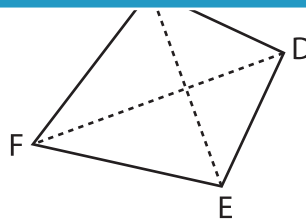
Area = _____

7)



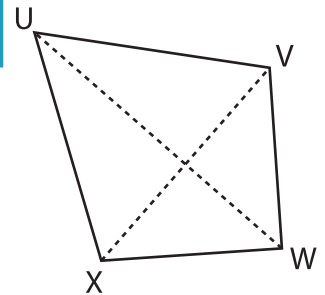
$LN = 22.4$ yd, $KM = 30.5$ yd

Area = _____



$DE = 17.5$ ft, $FG = 5.6$ ft

Area = _____



$UV = 80.4$ in, $WX = 70.7$ in

Area = _____