

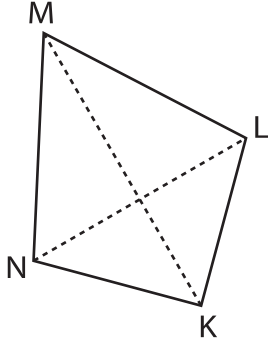
Name: _____

Area of a Kite

T1S2

Find the area of each kite.

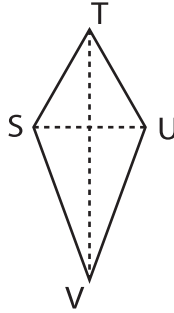
1)



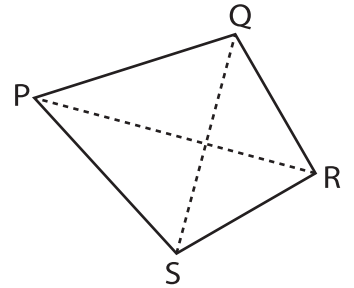
LN = 6.8 in, KM = 7.7

Area = _____

2)



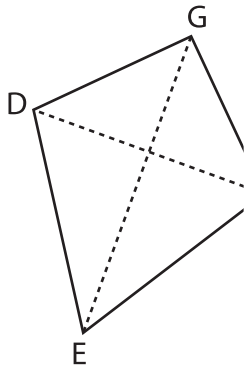
3)



SR = 10.4 yd, QS = 8.7 yd

Area = _____

4)



DF = 67.8 yd, EG = 8.4

Area = _____

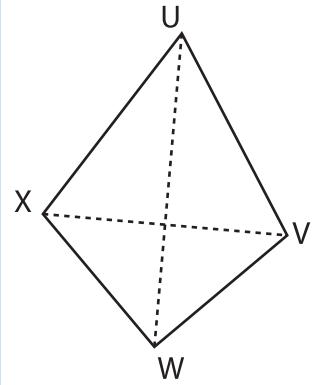
PREVIEW

Gain complete access to the largest collection of worksheets in all subjects!

Members, please log in to download this worksheet.

Not a member? Please sign up to gain complete access.

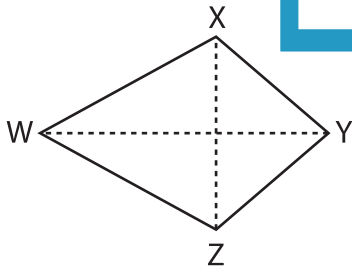
www.mathworksheets4kids.com



WU = 31.5 in, VX = 22.4 in

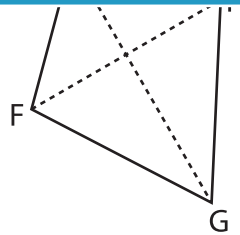
Area = _____

7)



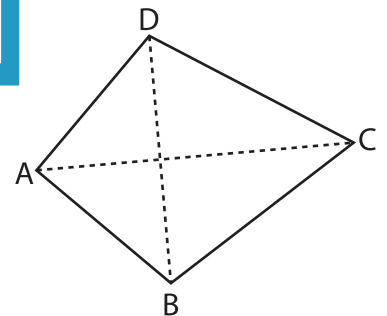
XZ = 2.4 ft, WY = 3.2 ft

Area = _____



EG = 54.1 yd, FH = 24.6 yd

Area = _____



AC = 12.3 ft, BD = 10.2 ft

Area = _____