

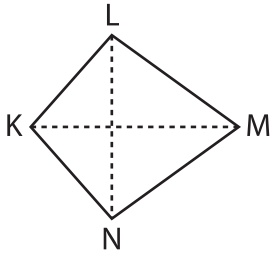
Name : \_\_\_\_\_

## Area of a Kite

T1S4

Find the area of each kite.

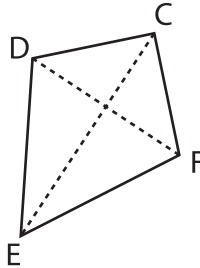
1)



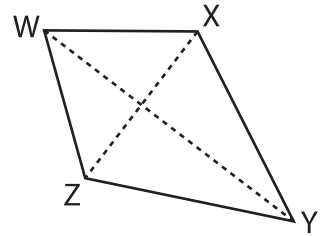
$KM = 80.5$  in,  $LN = 78$

Area = \_\_\_\_\_

2)



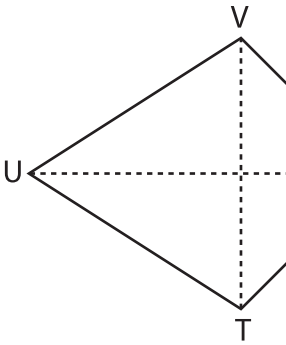
3)



$Z = 15.6$  yd,  $WY = 48.2$  yd

Area = \_\_\_\_\_

4)



$SU = 35.9$  yd,  $TV = 30$

Area = \_\_\_\_\_

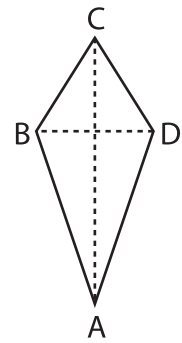
**PREVIEW**

Gain complete access to the largest collection of worksheets in all subjects!

Members, please log in to download this worksheet.

Not a member? Please sign up to gain complete access.

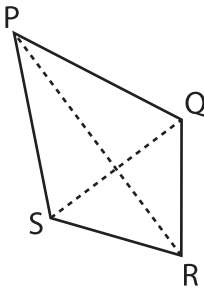
[www.mathworksheets4kids.com](http://www.mathworksheets4kids.com)



$D = 45.3$  ft,  $AC = 56.4$  ft

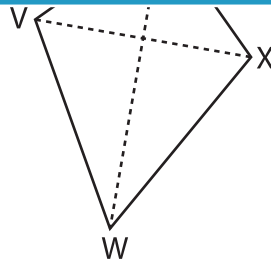
Area = \_\_\_\_\_

7)



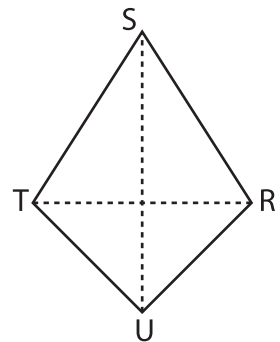
$QS = 19.9$  ft,  $PR = 22.2$  ft

Area = \_\_\_\_\_



$UW = 77.2$  in,  $VX = 53.9$  in

Area = \_\_\_\_\_



$SU = 8.8$  yd,  $RT = 7.5$  yd

Area = \_\_\_\_\_