

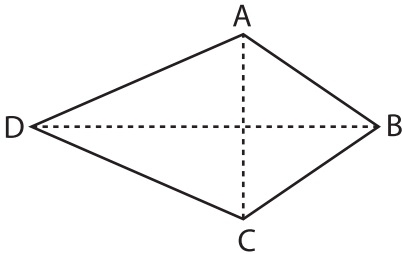
Name : _____

Area of a Kite

T1S5

Find the area of each kite.

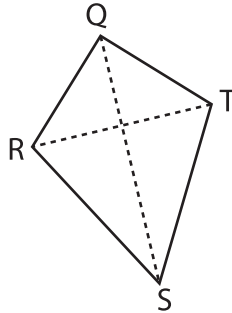
1)



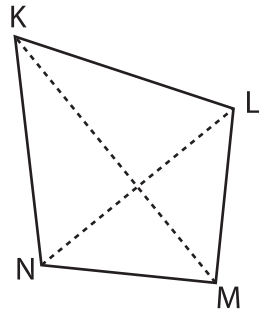
$BD = 41.5$ yd, $AC = 30$ yd

Area = _____

2)



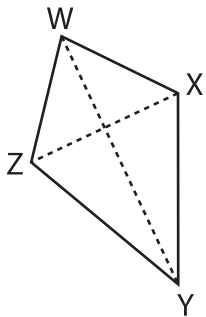
3)



$LN = 4.7$ in, $KM = 6.4$ in

Area = _____

4)



$WY = 12.6$ ft, $XZ = 9.0$ ft

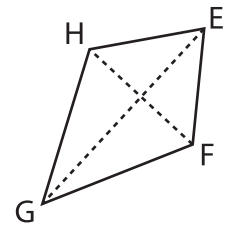
Area = _____

Gain complete access to the largest collection of worksheets in all subjects!

Members, please log in to download this worksheet.

Not a member? Please sign up to gain complete access.

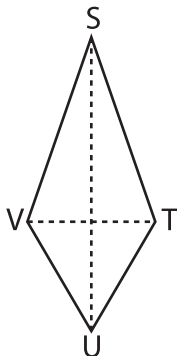
www.mathworksheets4kids.com



$HF = 35.5$ yd, $EG = 63.8$ yd

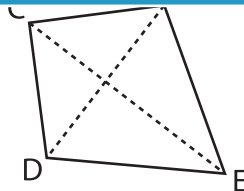
Area = _____

7)



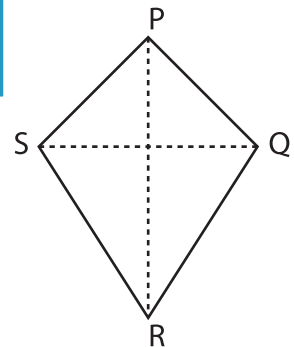
$TV = 75.2$ in, $SU = 92.9$ in

Area = _____



$DF = 7.4$ yd, $CE = 9.7$ yd

Area = _____



$PR = 13.5$ ft, $QS = 8.4$ ft

Area = _____