

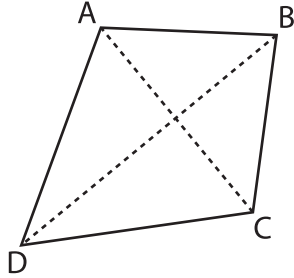
Name : _____

Area of a Kite

T1S1

Find the area of each kite.

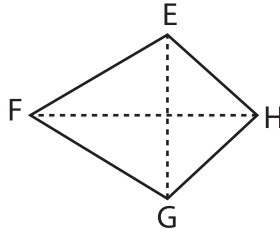
1)



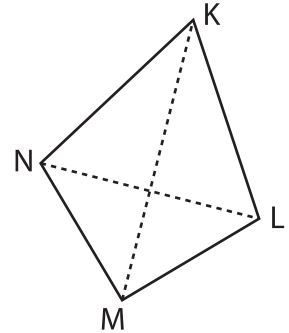
$AC = 17$ yd, $BD = 75$ yd

Area = _____ yd²

2)



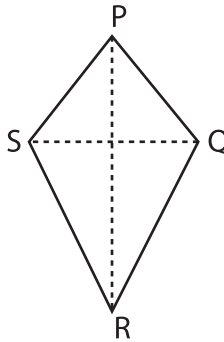
3)



$KL = 18$ yd, $LN = 396$ in

Area = _____ yd²

4)



$PR = 68$ in, $QS = 5.05$ in

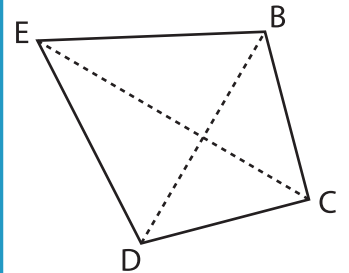
Area = _____ in²

Gain complete access to the largest collection of worksheets in all subjects!

Members, please log in to download this worksheet.

Not a member? Please sign up to gain complete access.

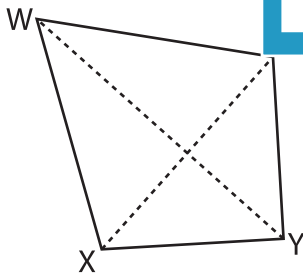
www.mathworksheets4kids.com



$BD = 2$ ft, $CE = 69.6$ in

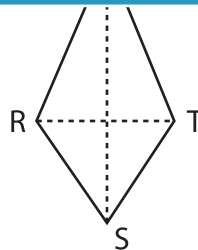
Area = _____ ft²

7)



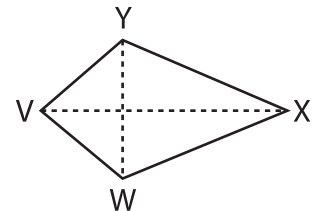
$XZ = 7$ yd, $WY = 42$ ft

Area = _____ ft²



$RT = 0.5$ yd, $SU = 27$ in

Area = _____ in²



$VX = 45$ in, $WY = 1.3$ ft

Area = _____ in²