

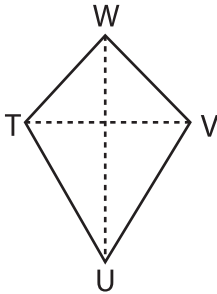
Name : _____

Area of a Kite

T1S4

Find the area of each kite.

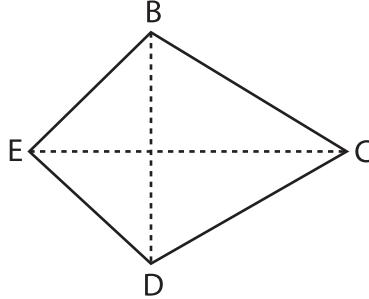
1)



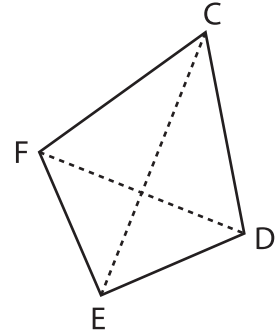
$UW = 9.2$ yd, $TV = 90$

Area = _____ yd²

2)



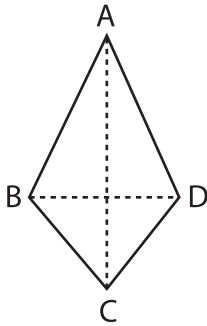
3)



$FE = 17$ yd, $DF = 31$ ft

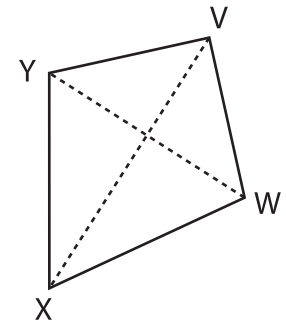
Area = _____ ft²

4)



$BD = 22$ ft, $AC = 612$

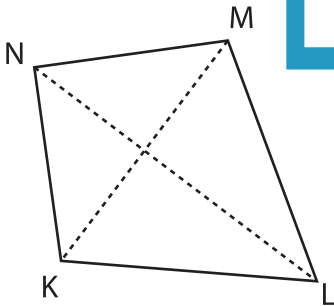
Area = _____ ft²



$YX = 1$ yd, $WY = 30.5$ in

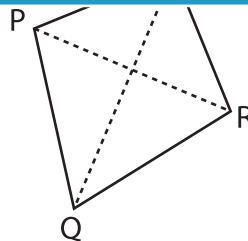
Area = _____ in²

7)



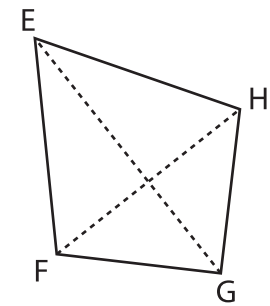
$LN = 2,448$ in, $KM = 48$ yd

Area = _____ yd²



$PR = 15$ ft, $QS = 10$ yd

Area = _____ ft²



$FH = 28$ in, $EG = 5$ ft

Area = _____ in²

PREVIEW

Gain complete access to the largest collection of worksheets in all subjects!

Members, please log in to download this worksheet.

Not a member? Please sign up to gain complete access.

www.mathworksheets4kids.com