

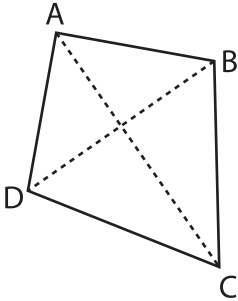
Name : _____

Area of a Kite

T1S5

Find the area of each kite.

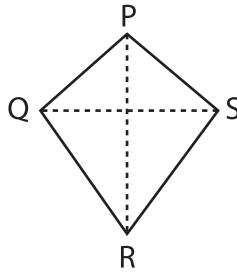
1)



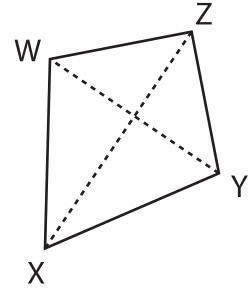
$BD = 20.8$ ft, $AC = 32$ ft

Area = _____ ft^2

2)



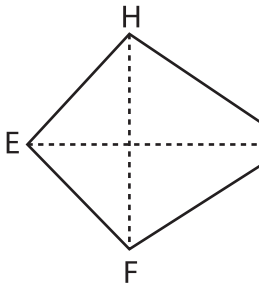
3)



$WY = 480$ in, $XZ = 52$ ft

Area = _____ ft^2

4)



$FH = 4$ in, $EG = 0.2$ yd

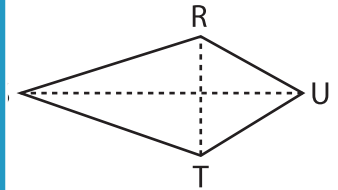
Area = _____ in^2

Gain complete access to the largest collection of worksheets in all subjects!

Members, please log in to download this worksheet.

Not a member? Please sign up to gain complete access.

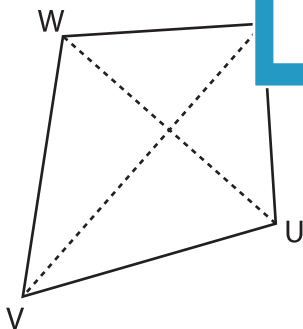
www.mathworksheets4kids.com



$RS = 2$ yd, $SU = 288$ in

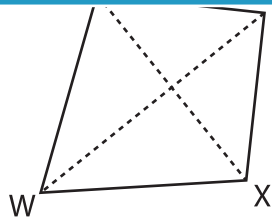
Area = _____ yd^2

7)



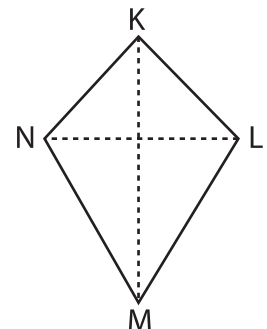
$TV = 5$ ft, $UW = 48.8$ in

Area = _____ in^2



$WY = 72$ yd, $VX = 1,800$ in

Area = _____ yd^2



$KM = 15$ ft, $LN = 4$ yd

Area = _____ ft^2