

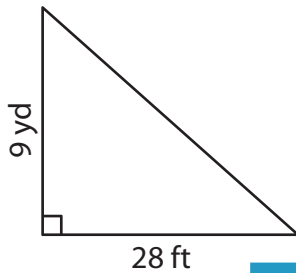
Name : \_\_\_\_\_

## Area – Mixed Shapes

Sheet 1

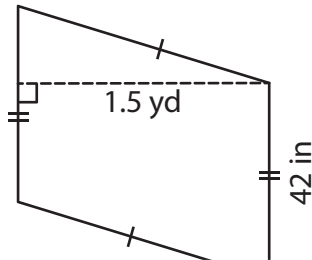
Find the area of each shape.

1)



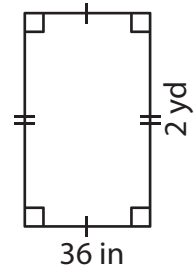
Area = \_\_\_\_\_ ft<sup>2</sup>

2)

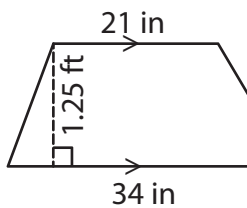


Area = \_\_\_\_\_ yd<sup>2</sup>

3)



4)



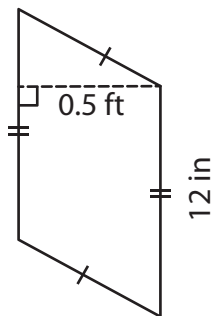
Area = \_\_\_\_\_ in<sup>2</sup>

Gain complete access to the largest collection of worksheets in all subjects!

Members, please log in to download this worksheet.

Not a member? Please sign up to gain complete access.

[www.mathworksheets4kids.com](http://www.mathworksheets4kids.com)



Area = \_\_\_\_\_ ft<sup>2</sup>

7) The height of a trapezoid is 1.5 yards. The top base is 8.2 yards and 4.6 yards, what is the area of the trapezoid?

\_\_\_\_\_ square yards

8) Determine the area of the rectangle, if it is 2.3 feet long and 13 inches wide.

\_\_\_\_\_ square inches