

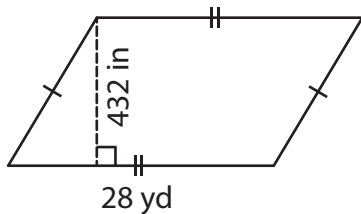
Name : _____

Area – Mixed Shapes

Sheet 3

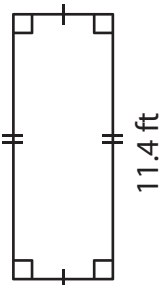
Find the area of each shape.

1)



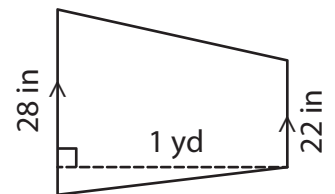
Area = _____ yd

2)

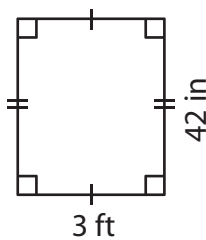


Area = _____ in²

3)



4)



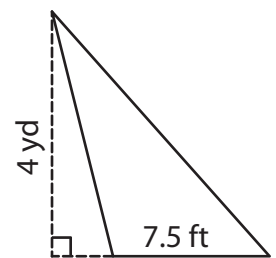
Area = _____ ft

PREVIEW
Gain complete access to the largest collection of worksheets in all subjects!

Members, please log in to download this worksheet.

Not a member? Please sign up to gain complete access.

www.mathworksheets4kids.com



Area = _____ yd²

7) The base and height of triangle.

Determine the area of the

_____ square inches

8) The height and base of a parallelogram are 12 yards and 39 feet respectively. Find the area of the parallelogram.

_____ square feet