

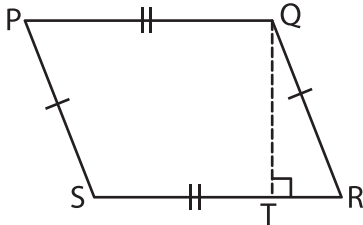
Name : _____

Area – Mixed Shapes

L3S3

Find the area of each shape. (Use $\pi = 3.14$)

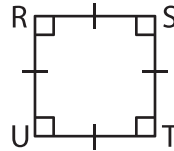
1)



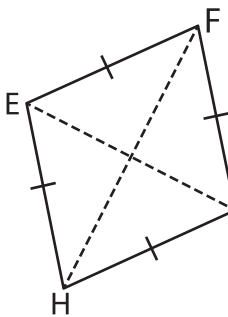
$QT = 15$ yd ; $PQ = 21$ yd

Area = _____

2)



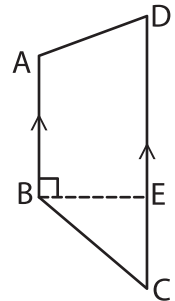
4)



$FH = 18$ in ; $EG = 11$ in

Area = _____

3)



$AB = 17$ in ; $DC = 23$ in
 $BE = 14$ in

Area = _____

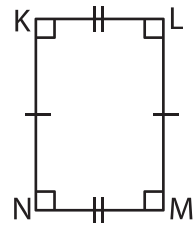
PREVIEW

Gain complete access to the largest collection of worksheets in all subjects!

Members, please log in to download this worksheet.

Not a member? Please sign up to gain complete access.

www.mathworksheets4kids.com



$KL = 6$ ft ; $LM = 9$ ft

Area = _____

7) Determine the area of

8) The diagonals of a kite measure 17 yards and 25 yards. What is the area of the kite?
