

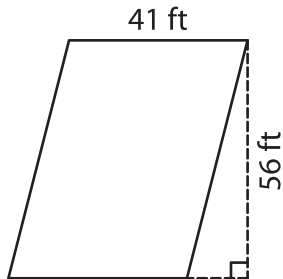
Name : _____

Parallelogram – Area

T2L2S2

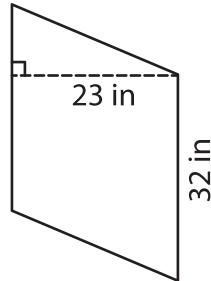
A) Find the area of each parallelogram.

1)

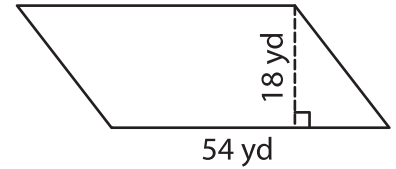


Area = _____

2)



3)



Area = _____

B) Find the area of each parallelogram.

4) base = 36 in , height = 12 in

Area = _____

6) base = 50 yd , height = 10 yd

Area = _____

8) A parallelogram has a base of 12 inches and a height of 73 inches.

9) Determine the area of a parallelogram, if the height and base of the parallelogram are 12 inches and 73 inches respectively.

PREVIEW

Gain complete access to the largest collection of worksheets in all subjects!

Members, please log in to download this worksheet.

Not a member? Please sign up to gain complete access.

www.mathworksheets4kids.com