

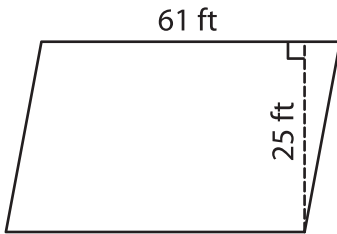
Name : _____

Parallelogram – Area

T2L2S4

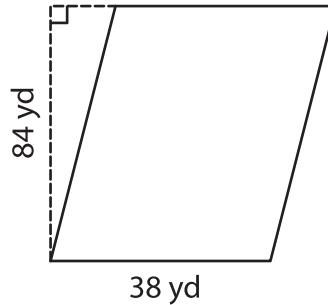
A) Find the area of each parallelogram.

1)



Area = _____

2)



B) Find the area of each parallelogram.

4) base = 41 in , height = 2 ft

Area = _____

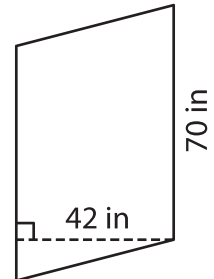
6) base = 24 ft , height = 3 yd

Area = _____

8) What is the area of a parallelogram with a base of 12 yards and a height of 9 yards?

9) The base and height of a parallelogram are 93 inches and 50 inches respectively. Find the area of a parallelogram.

3)



Area = _____

PREVIEW

Gain complete access to the largest collection of worksheets in all subjects!

Members, please log in to download this worksheet.

Not a member? Please sign up to gain complete access.

www.mathworksheets4kids.com