

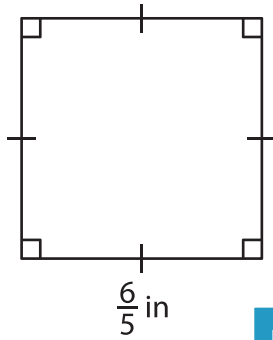
Name : _____

Area – Quadrilateral

L1S2

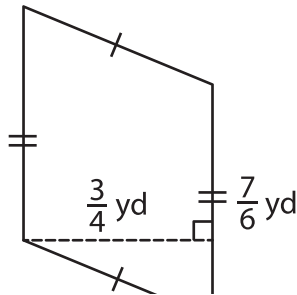
Find the area of each quadrilateral.

1)

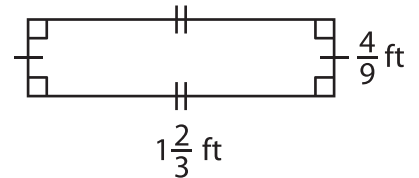


Area = _____

2)

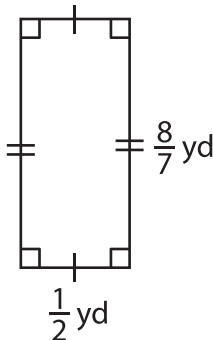


3)



Area = _____

4)



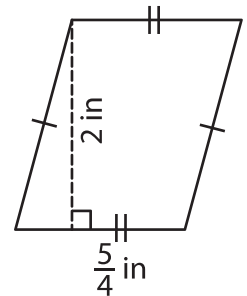
Area = _____

Gain complete access to the largest collection of worksheets in all subjects!

Members, please log in to download this worksheet.

Not a member? Please sign up to gain complete access.

www.mathworksheets4kids.com



Area = _____

7) Determine the area of a parallelogram with a base of $\frac{4}{5}$ inch and a height of $\frac{2}{7}$ inch respectively.

Area = _____

8) If the side of a square measures $\frac{9}{5}$ yards, find the area of the square.