

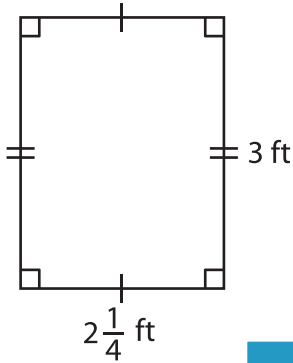
Name : \_\_\_\_\_

## Area – Quadrilateral

L1S3

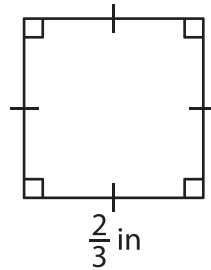
Find the area of each quadrilateral.

1)



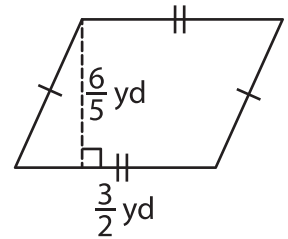
Area = \_\_\_\_\_

2)

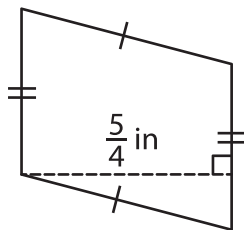


Area = \_\_\_\_\_

3)



4)



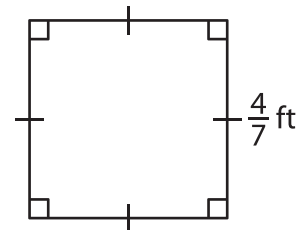
Area = \_\_\_\_\_

**PREVIEW**  
Gain complete access to the largest collection of worksheets in all subjects!

Members, please log in to download this worksheet.

Not a member? Please sign up to gain complete access.

[www.mathworksheets4kids.com](http://www.mathworksheets4kids.com)



Area = \_\_\_\_\_

7) A rectangle is  $\frac{2}{5}$  yard long and  $\frac{3}{5}$  yard wide.

\_\_\_\_\_

8) The height and base of a parallelogram are  $\frac{5}{2}$  feet and  $4\frac{1}{2}$  feet respectively. Determine the area of the parallelogram.

\_\_\_\_\_