

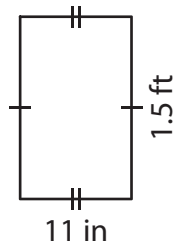
Name : _____

Area of a Quadrilateral

Sheet 1

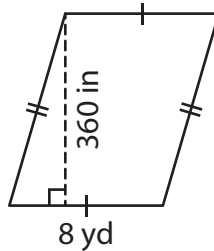
Find the area of each shape. Round your answer to two decimal places.

1)



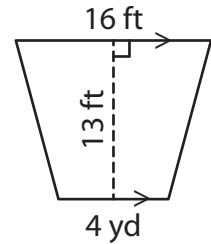
Area = _____

2)

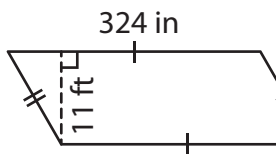


Area = _____ ft^2

3)



4)



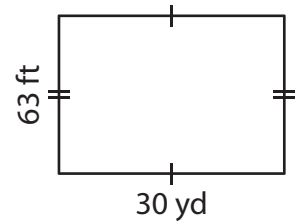
Area = _____

Gain complete access to the largest collection of worksheets in all subjects!

Members, please log in to download this worksheet.

Not a member? Please sign up to gain complete access.

www.mathworksheets4kids.com



Area = _____ yd^2

7) The height of a trapezoid is 34 inches and 8 yards, what is the area of the trapezoid?

_____ square yards

8) The length and width of a rectangle are 23 feet and 4 yards respectively. Determine the area of the rectangle.

_____ square feet