

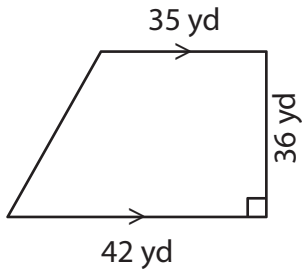
Name : _____

Area – Quadrilateral

L2S2

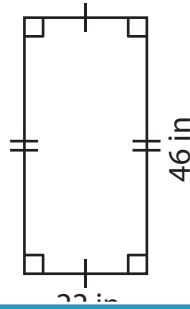
Find the area of each quadrilateral.

1)



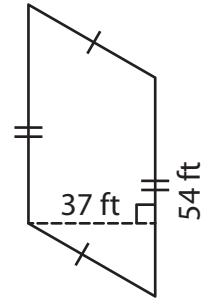
Area = _____

2)



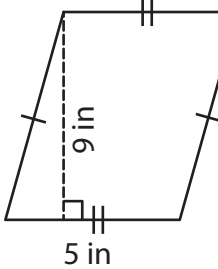
Area = _____

3)



Area = _____

4)

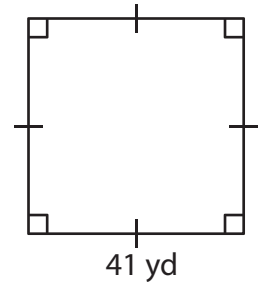


Area = _____

Gain complete access to the largest collection of worksheets in all subjects!

Members, please log in to download this worksheet.

Not a member? Please sign up to gain complete access.



Area = _____

7) The side of a square m

8) What is the area of the rectangle whose length is 38 inches and width is 27 inches?

Name : _____

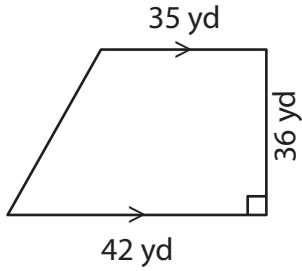
Answer key

Area – Quadrilateral

L2S2

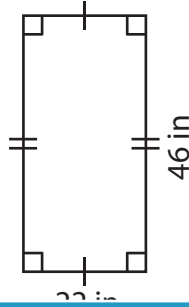
Find the area of each quadrilateral.

1)

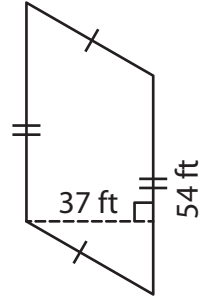


Area = 1,386 yd²

2)

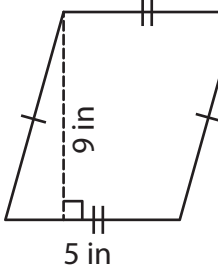


3)



Area = 1,998 ft²

4)



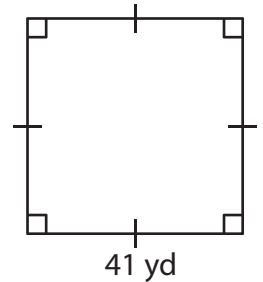
Area = 45 in²

Gain complete access to the largest collection of worksheets in all subjects!

Members, please log in to download this worksheet.

Not a member? Please sign up to gain complete access.

www.mathworksheets4kids.com



Area = 1,681 yd²

7) The side of a square m

2,500 square yards

8) What is the area of the rectangle whose length is 38 inches and width is 27 inches?

1,026 square inches