

Name : _____

Area of a Rectangle

A) Find the area of each rectangle for the given measurements.

1) length = 37 yd, width = 93 ft

Area = _____ yd²

2) width = 10 in, length = 0.53 yd

Area = _____ in²

3) width = 72 in, length = 7 ft


4) length = 3 yd, width = 8 ft

Area = _____

ft²

B) Find the area of each

5)



Area = _____

Gain complete access to the largest collection of worksheets in all subjects!

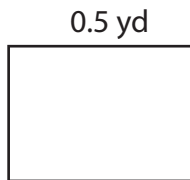
Members, please log in to download this worksheet.

Not a member? Please sign up to gain complete access.

www.mathworksheets4kids.com

in²

7)



Area = _____ in²

Area = _____ ft²

9) What is the area of the rectangle UVWX, if UV = 12 yards and VW = 108 inches?

_____ square yards

Name : _____

Answer key

T2S5

Area of a Rectangle

A) Find the area of each rectangle for the given measurements.

1) length = 37 yd, width = 93 ft

Area = 1,147 yd²

2) width = 10 in, length = 0.53 yd

Area = 190.8 in²


3) width = 72 in, length = 7 ft

4) length = 3 yd, width = 8 ft

Area = 42 ft²

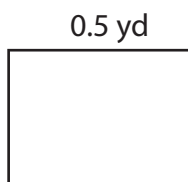
B) Find the area of each

5)



Area = 468 ft²

7)



Area = 252 in²

Area = 1,280 ft²

9) What is the area of the rectangle UVWX, if UV = 12 yards and VW = 108 inches?

36 square yards