

Name : _____

Area of a Rhombus

T2L2S2

A) Find the area of each rhombus for the given measurements.

1) diagonal 1 = 49 yd, diagonal 2 = 60 yd

2) diagonal 1 = 75 in, diagonal 2 = 25 in

Area = _____

Area = _____

3) diagonal 1 = 28 ft, diagonal 2 = 42 ft

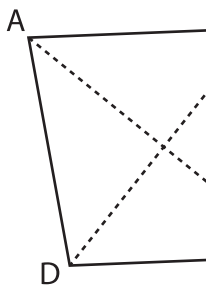
4) diagonal 1 = 37 yd, diagonal 2 = 73 yd

Area = _____

Area = _____

B) Find the area of each rhombus.

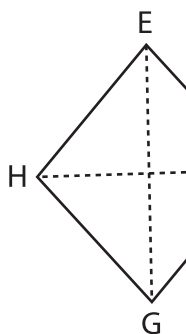
5)



AC = 66 in ; BD = 99 ft

Area = _____

7)



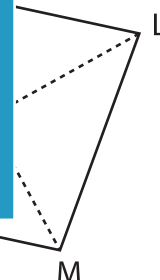
FH = 68 ft ; EG = 87 ft

Area = _____



LN = 99 ft

Area = _____



KM = 43 yd ; LN = 51 yd

Area = _____

9) The diagonals of a rhombus measure 34 inches and 84 inches. Find the area.

PREVIEW

Gain complete access to the largest collection of worksheets in all subjects!

Members, please log in to download this worksheet.

Not a member? Please sign up to gain complete access.

www.mathworksheets4kids.com