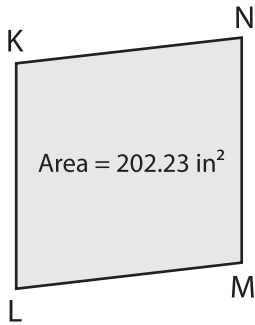


Name : _____

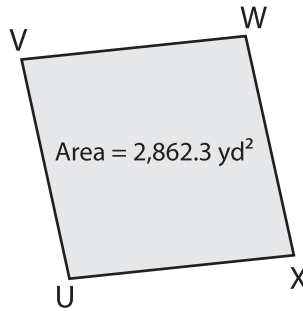
Area of a Rhombus

1)



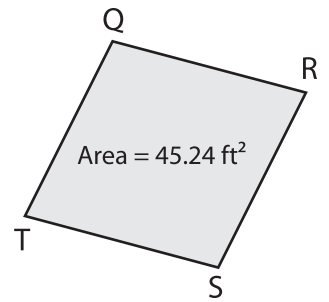
KM = 18.9 in. Find LN.

2)



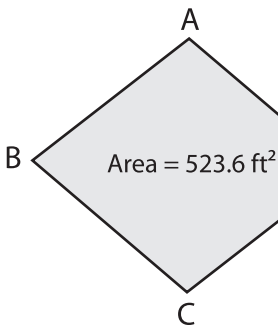
UW = 70.5 yd. Find VX.

3)



RT = 10.4 ft. Find QS.

4)



AC = 30.8 ft. Find BD.

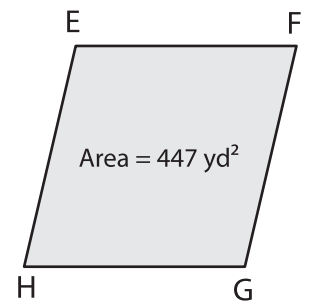
PREVIEW

Gain complete access to the largest collection of worksheets in all subjects!

Members, please log in to download this worksheet.

Not a member? Please sign up to gain complete access.

www.mathworksheets4kids.com



FH = 44.7 yd. Find EG.

7) The length of one of the diagonals is 24.44 square feet.

_____ of the other diagonal, if the

8) The area of a rhombus is 665.16 square inches. If one of the diagonals measures 27.6 inches, determine the length of the other diagonal.
