

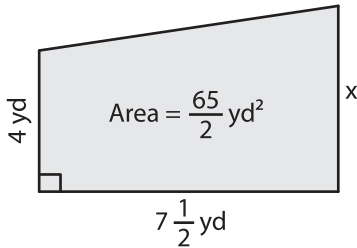
Name : \_\_\_\_\_

## Trapezoid - Area

Sheet 2

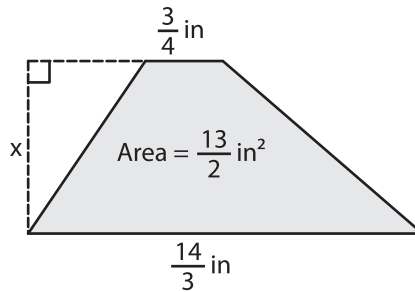
Find x.

1)

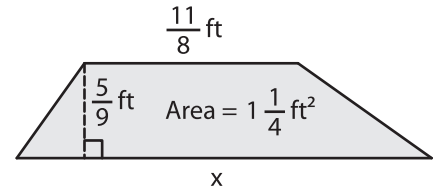


x = \_\_\_\_\_

2)

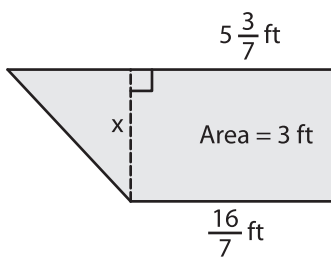


3)



x = \_\_\_\_\_

4)



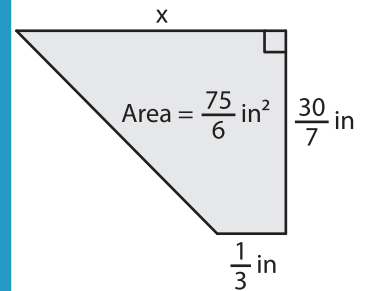
x = \_\_\_\_\_

**PREVIEW**  
Gain complete access to the largest collection of worksheets in all subjects!

Members, please log in to download this worksheet.

Not a member? Please sign up to gain complete access.

[www.mathworksheets4kids.com](http://www.mathworksheets4kids.com)



x = \_\_\_\_\_

7) The sum of the parallel bases is  $2\frac{3}{16}$  square inches.

the area of the trapezoid is

8) The perpendicular distance between the bases of a trapezoid is  $2\frac{2}{5}$  feet and one of the bases measures  $\frac{3}{4}$  foot. If the area of the trapezoid is 6 square feet, determine the length of the other base.