

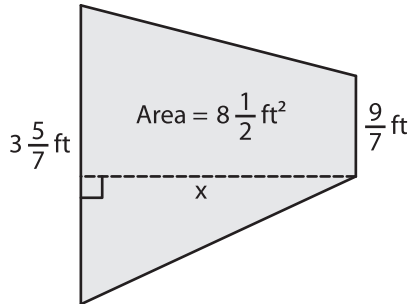
Name : _____

Trapezoid - Area

Sheet 3

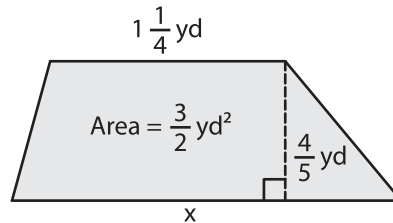
Find x.

1)

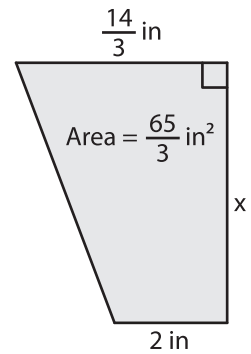


x = _____

2)

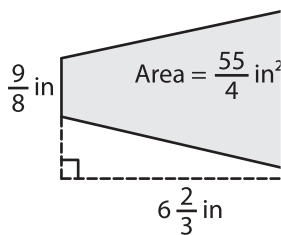


3)



x = _____

4)



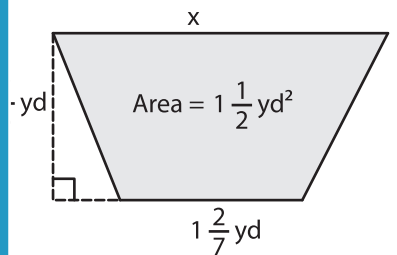
x = _____

Gain complete access to the largest collection of worksheets in all subjects!

Members, please log in to download this worksheet.

Not a member? Please sign up to gain complete access.

www.mathworksheets4kids.com



x = _____

7) The area of a trapezoid if the lengths of the bases are _____ and the distance between the bases, _____

8) A trapezoid has an area of $10\frac{8}{9}$ square inches. If the height of the trapezoid is $\frac{7}{2}$ inches and one of the parallel bases is $5\frac{1}{3}$ inches, find the other base.