

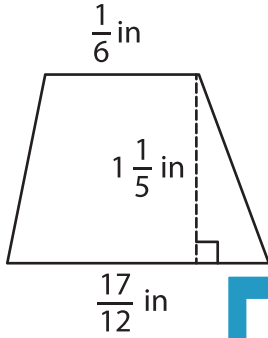
Name : _____

Area – Trapezoid

T1S2

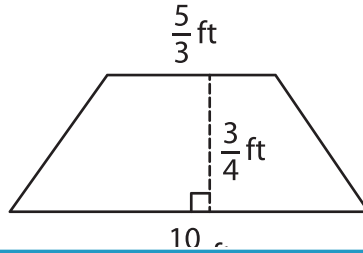
Find the area of each trapezoid.

1)

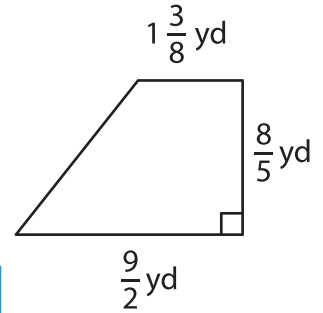


Area =

2)

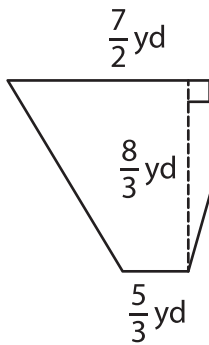


3)



Area =

4)



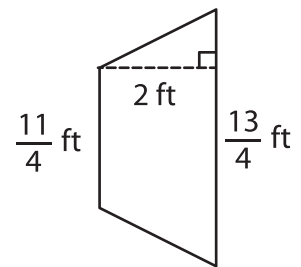
Area =

PREVIEW
Gain complete access to the largest collection of worksheets in all subjects!

Members, please log in to download this worksheet.

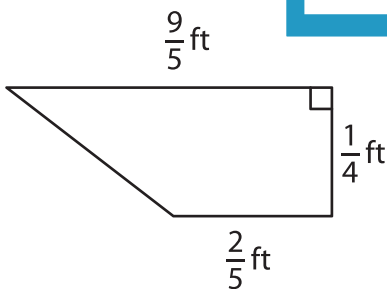
Not a member? Please sign up to gain complete access.

www.mathworksheets4kids.com

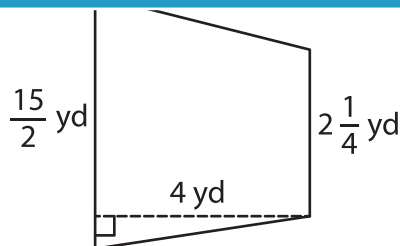


Area =

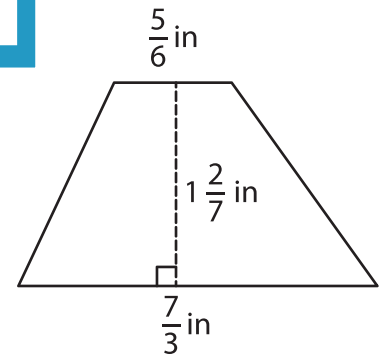
7)



Area =



Area =



Area =