

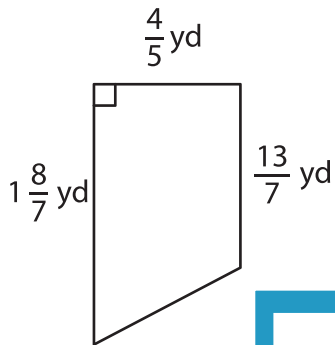
Name : _____

Area – Trapezoid

T1S3

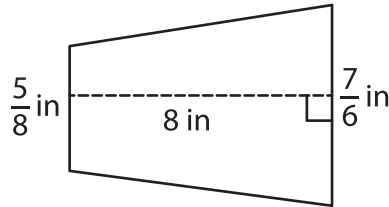
Find the area of each trapezoid.

1)

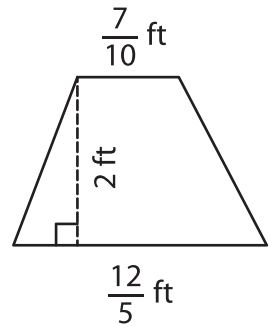


Area =

2)

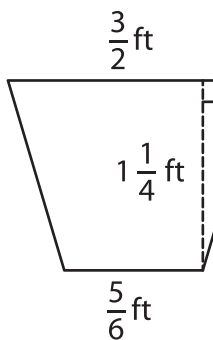


3)



Area =

4)



Area =

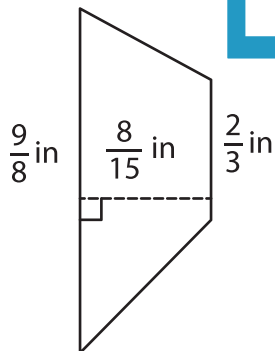
Gain complete access to the largest collection of worksheets in all subjects!

Members, please log in to download this worksheet.

Not a member? Please sign up to gain complete access.

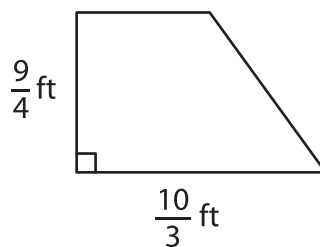
www.mathworksheets4kids.com

7)



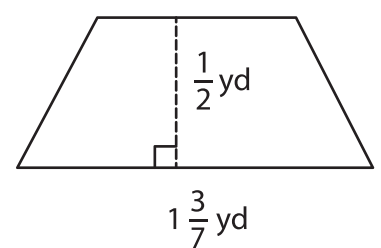
Area =

$\frac{3}{3}$ ft



Area =

$\frac{15}{14}$ yd



Area =